



**L-Università
ta' Malta**

MATRICULATION AND SECONDARY EDUCATION CERTIFICATE
EXAMINATIONS BOARD

**SECONDARY EDUCATION CERTIFICATE LEVEL
2023 MAIN SESSION**

SUBJECT:	Hairdressing and Beauty
PAPER NUMBER:	Controlled – Unit 1
DATE:	17 th May 2021
TIME:	10:00 a.m. to 11:35 a.m.

Name of candidate _____

I.D. number _____

School _____

Class _____

Answer **ALL** questions in the space provided.

Scenario

- Maria is the manager of a Hair and Beauty Salon.
- Jane has just graduated as a Hair and Beauty Specialist.
- Jane has started to work in Maria’s Salon.

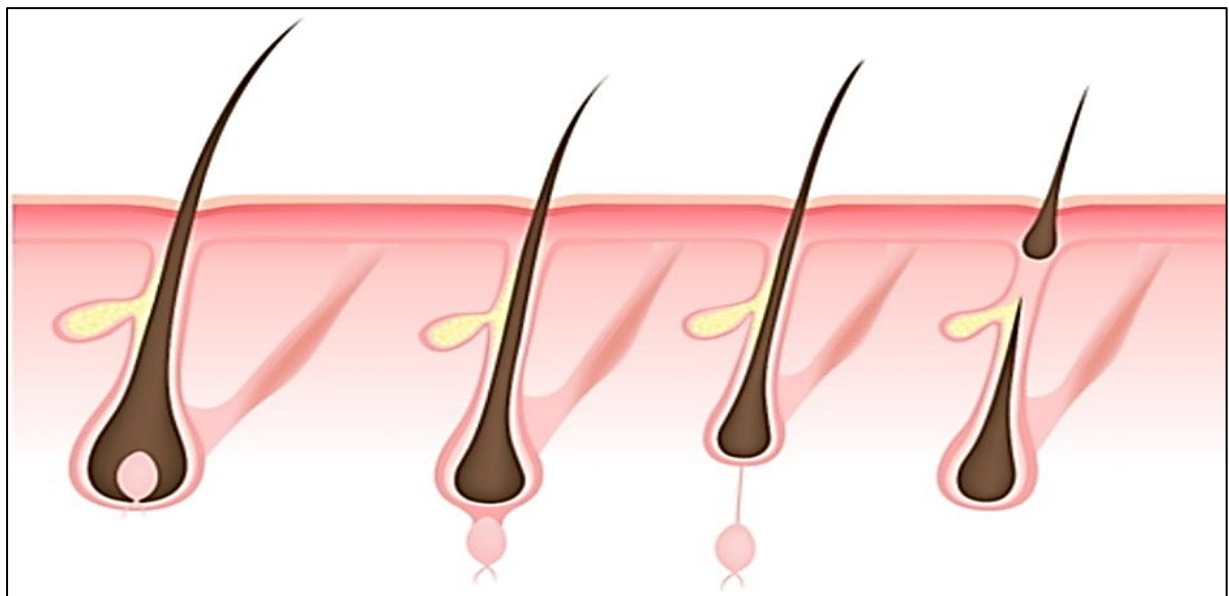
Question 1

K-5 (4 marks)

a. List **FOUR** factors that affect hair growth.

- Factor 1: _____ (0.25)
- Factor 2: _____ (0.25)
- Factor 3: _____ (0.25)
- Factor 4: _____ (0.25)

b. Identify **TWO** main stages in the hair growth cycle in the diagram below.



Stage 1

Stage 2

Stage 3

Stage 4

Anagen

Resting

(Source: <https://images.app.goo.gl/YtrW8geUTNaG2vne9>)

(1)

Question 3

C-2 (6 marks)

- a. Identify from the box below **TWO** important factors that need to be considered during a client consultation for a hairdressing and beauty service.

identification of client's requirements and concerns	sexual orientation
marital status	head/face shape

Factor 1: _____ (1)

Factor 2: _____ (1)

- b. Describe **TWO** factors that may prevent a choice of service during consultation.

Factor 1: _____

_____ (1)

Factor 2: _____

_____ (1)

- c. Discuss **TWO** limiting factors and **TWO** contraindications that may prevent a choice of service during a consultation.

(2)

Question 4

C-3 (6 marks)

a. Describe **TWO** appropriate Personal Protective Equipment that needs to be worn by the professional while providing the following professional services:

PPE for hair dye: _____

(1)

PPE for facial: _____

(1)

b. Explain how the following types of disinfection and sterilisation are used in a salon.

UV cabinet: _____

(1)




Chemical Sterilizer: _____



(1)

Question 5

K-10 (4 marks)

a. Identify the **FIVE** different types of makeup brushes below.

 <p>(Source: https://www.minty.com.mt/)</p>	<p>Brush 1: _____ (0.2)</p>
 <p>(Source: https://www.amazon.com/)</p>	<p>Brush 2: _____ (0.2)</p>
 <p>(Source: https://www.hair-shop.com/)</p>	<p>Brush 3: _____ (0.2)</p>

 <p>(Source: https://www.cultbeauty.co.uk/)</p>	<p>Brush 4: _____ (0.2)</p>
 <p>(Source: https://www.cultbeauty.com/)</p>	<p>Brush 5: _____ (0.2)</p>

b. Outline the use of the **FIVE** different makeup brushes identified in part (a) above.

Use of brush 1: _____
_____ (0.2)

Use of brush 2: _____
_____ (0.2)

Use of brush 3: _____
_____ (0.2)

Use of brush 4: _____
_____ (0.2)

Use of brush 5: _____
_____ (0.2)

This question continues on next page.

Blank Page

Blank Page