



L-Università
ta' Malta

MATRICULATION AND SECONDARY EDUCATION CERTIFICATE
EXAMINATIONS BOARD

**SECONDARY EDUCATION CERTIFICATE LEVEL
2021 SUPPLEMENTARY SESSION**

SUBJECT:	Hairdressing and Beauty
PAPER NUMBER:	Synoptic – Unit 1
DATE:	1 st November 2021
TIME:	4:00 p.m. to 6:05 p.m.

**THIS PAPER SHOULD BE RETURNED TO THE INVIGILATOR
AFTER THE EXAMINATION.**

b. Outline **TWO** benefits of the receptionist acting professionally when dealing with customers.

Benefit 1: _____
_____ (1)

Benefit 2: _____
_____ (1)

c. Describe **TWO** ways a receptionist can increase sales.

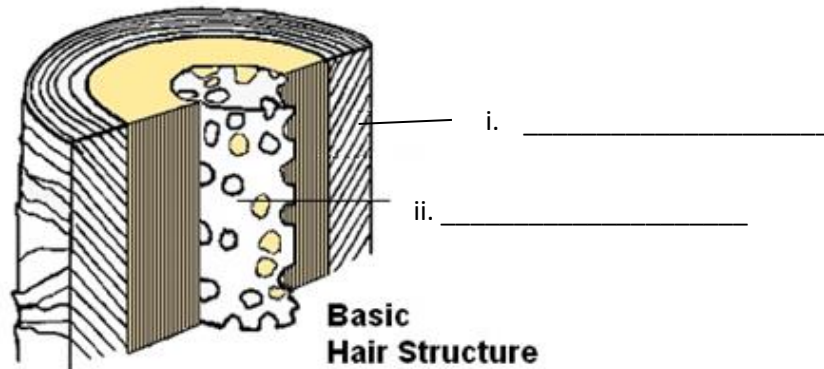
_____ (4)

Please turn the page.

Question 4

K-4 (8 marks)

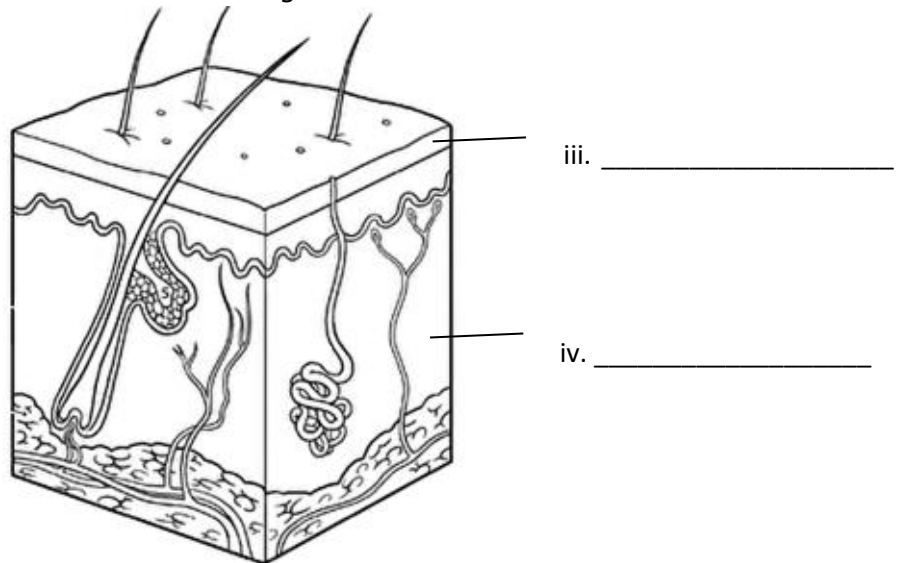
a. Label the **TWO** sections of the hair structure in diagram below:



(Source: <https://www.hairgrowthsos.com/hair-structure.html>)

(1)

Label the **TWO** sections of the skin structure in diagram below:



(Source: shorturl.at/loDLU)

(1)

b. Name **TWO** functions of the hair shaft and **TWO** functions of the skin structure.

Hair Shaft function 1: _____ (0.5)

Hair Shaft function 2: _____ (0.5)

Skin Structure function 1: _____ (0.5)

Skin Structure function 2: _____ (0.5)

Question 6

K-6 (8 marks)

a. List **FOUR** basic face shapes.

Face Shape 1: _____

Face Shape 2: _____





Face Shape 3: _____

Face Shape 4: _____ (2)

b. Identify the **FOUR** different facial features provided in Table 1. Use face features provided below.


deep set eyes	protruding eyes	hooked nose	wide nose	hooded eyes
	pointed nose	wide set eyes		

Table 1

		Facial Features	
i.	 <p>(Source: shorturl.at/lwBE4)</p>	<p>_____</p> <p>_____</p>	(0.5)
ii.	 <p>(Source: shorturl.at/lwBE4)</p>	<p>_____</p> <p>_____</p>	(0.5)
iii.	 <p>(Source: shorturl.at/opBC5)</p>	<p>_____</p> <p>_____</p>	(0.5)
iv.	 <p>(Source: shorturl.at/opBC5)</p>	<p>_____</p> <p>_____</p>	(0.5)

This question continues on next page.

c. i. Use your pen to illustrate **TWO** make-up techniques to correct the following face shapes.



(Source: <https://www.pinterest.com/pin/493847915360331788/>)



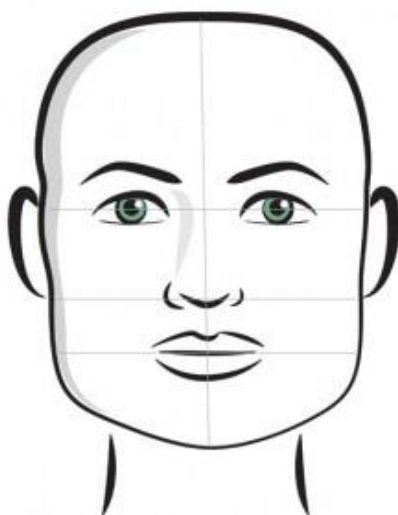
(Source: <https://www.pinterest.com/pin/658581145485513353/>)

(2)

ii. Use your pen to illustrate **TWO** hairstyles to enhance the following face shapes.



(Source: <https://www.selectspecs.com/blog/choosing-the-right-frames-for-your-face-shape/>)



(Source: <https://www.wonderwardrobes.com/glasses-for-your-face-shape/>)





(2)

Please turn the page.

Question 8

K-10 (8 marks)

a. In the space provided, identify the **FOUR** different types of make-up brushes.

<p>Brush 1</p>	 <p>(Source: shorturl.at/vAIP6)</p>	<hr/>	<p>(0.5)</p>
<p>Brush 2</p>	 <p>(Source: shorturl.at/amnvJ)</p>	<hr/>	<p>(0.5)</p>
<p>Brush 3</p>	 <p>(Source: shorturl.at/uCVW8)</p>	<hr/>	<p>(0.5)</p>
<p>Brush 4</p>	 <p>(Source: shorturl.at/hopxV)</p>	<hr/>	<p>(0.5)</p>

This question continues on next page.

Blank Page

Blank Page